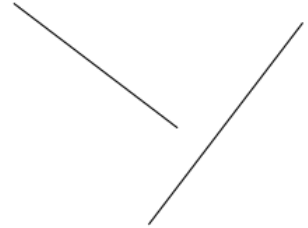
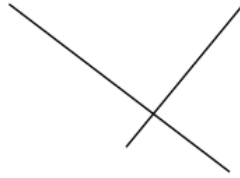
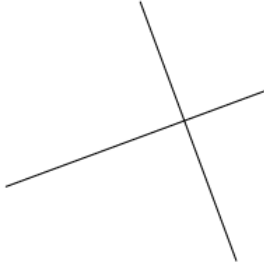


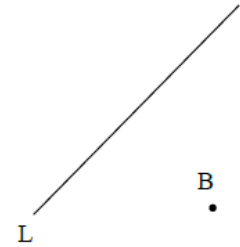
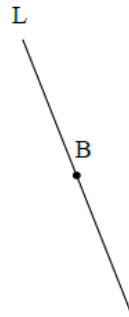
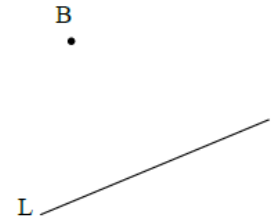
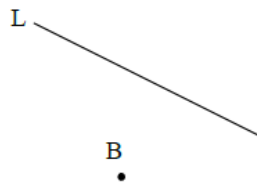
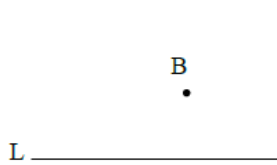
Parallel Lines & Perpendicular Lines

Name: \_\_\_\_\_ Class: S. 1 \_\_\_\_\_ ( ) Date: \_\_\_\_\_

1. By using set-squares, determinate which of the following pair(s) of straight lines are perpendicular.



2. By using set-squares, draw a straight line such that it passes through point B and is perpendicular to L.



3. By using set-squares, draw a straight line such that it passes through point A and is parallel to L.

