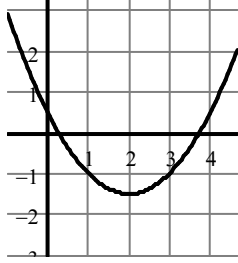
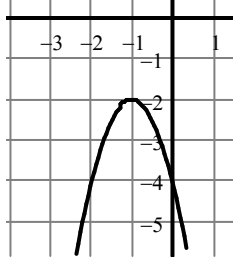


ZADATAK: Odredi koordinate tjemena (1), vrijednost vodećeg koeficijenta parabola sa slika, a potom napiši njihove jednadžbe oblika: $y = ax^2 + bx + c$ (2) i $y = a(x - x_0)^2 + y_0$ (3).

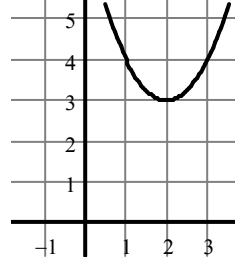
Slika 1.



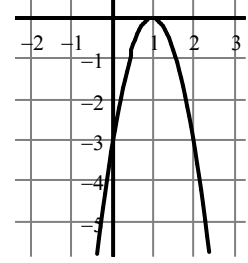
Slika 2.



Slika 3.



Slika 4.



(1)

(2)

(3)
