

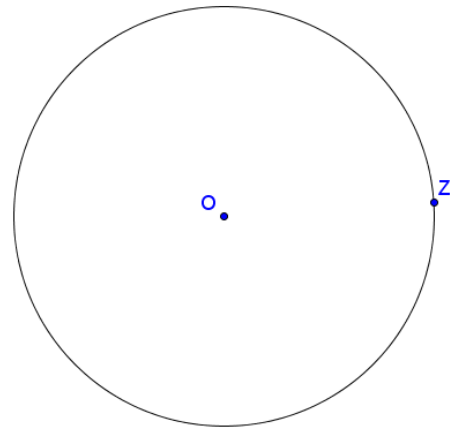
Task A-0: Angle at Centre and Angle at Circumference

Step 1

Create a circle.

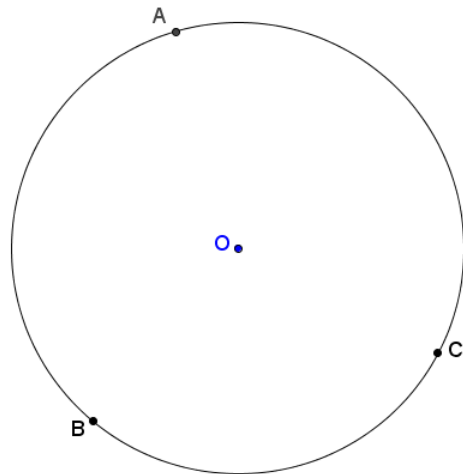
Rename the centre as O and the point on the circumference as Z.

Hide point Z.



Step 2

Create points A, B and C on the circumference.

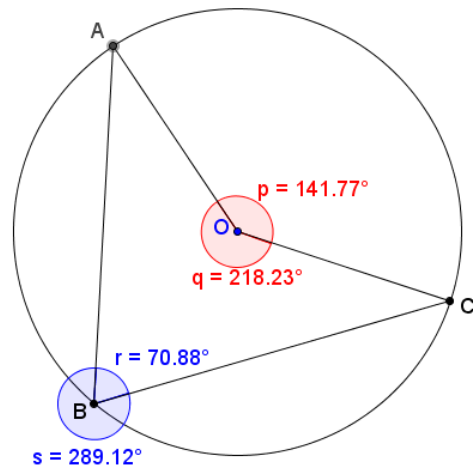


Step 3

Refer to the figure, draw the line segments and create $\angle AOC$, $\angle ABC$ and their reflex angles.

Rename the angles as p, q, r and s as in the figure.

Set the colour of the angles at centre as red and the angles at circumference as blue.



Step 4

We want to show the pair p and r if $r < s$, otherwise show the pair q and s.

Right click on r, select object properties and choose the “Advanced” panel. In the field “Condition to Show Object”, type “ $r < s$ ”, do the same for the angle p

Right click on s, select object properties and choose the “Advanced” panel. In the field “Condition to Show Object”, type “ $s < r$ ”, do the same for the angle q

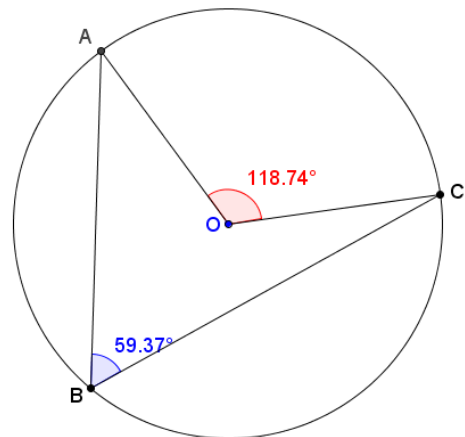
Step 5

Insert text `ABC` to show the sizes of $\angle ABC$ and $\angle AOC$.

The size of $\angle ABC$ is r if $r < s$, otherwise it is s . This can be written as $\text{if}[r < s, r, s]$.

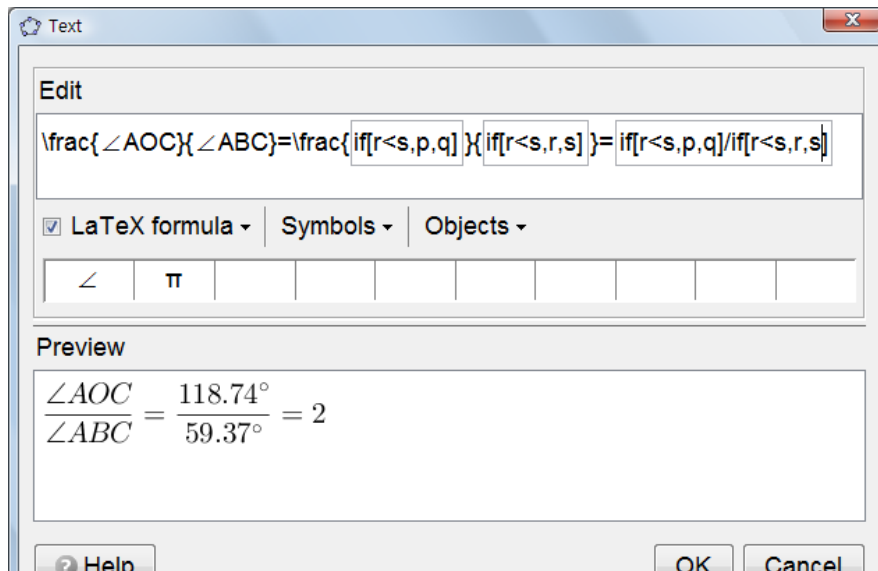
The size of $\angle AOC$ is the corresponding “partner” of r and s . If $r < s$, it is p , otherwise it is q , i.e. $\text{if}[r < s, p, q]$.

Angle at centre = 118.74°
 Angle at circumference = 59.37°



Step 6

Insert text `ABC` to show the ratio between $\angle ABC$ and $\angle AOC$. To create a fraction, we use the LaTeX command `\frac{numerator}{denominator}`

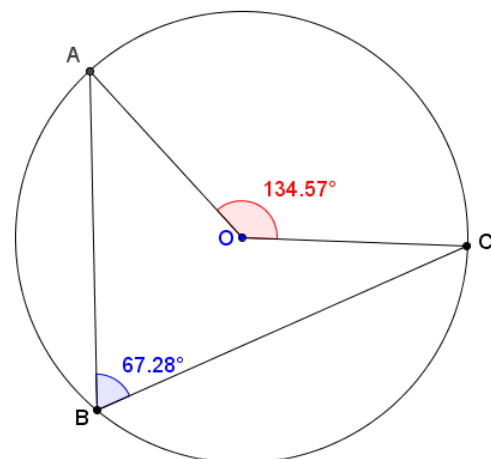


Step 7

To change the colour of the numerator and denominator, we enclose the numerator by `\red{ }` and the denominator by `\blue{ }`.

`\frac{\red{\text{if}[r < s, p, q]}}{\blue{\text{if}[r < s, r, s]}}`

Angle at centre = 134.57°
 Angle at circumference = 67.28°
 $\frac{\angle AOC}{\angle ABC} = \frac{134.57^\circ}{67.28^\circ} = 2$



~ End of Task A-0 ~

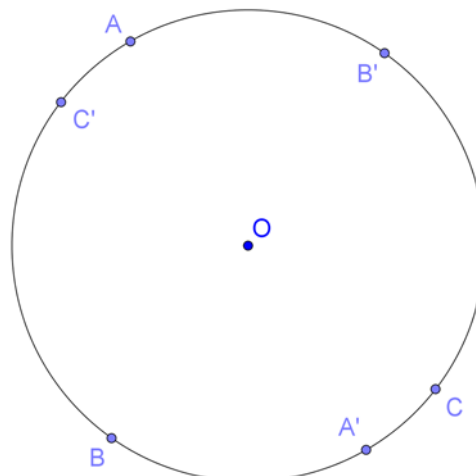
Task A: Angle at Centre and Angle at Circumference

Step 1

Create a circle.


Rename the centre as O and the point on the circumference as Z.

Hide point Z.



Step 2

Create points A, B and C on the circumference.

Create their opposite points by using “Reflect Object about Point” .

Step 3

To create a point P that act as a “phantom” of A and snap to the point F, we use the command “DynamicCoordinates”.

The format of the command is **DynamicCoordinates[<Point A>, <Number X>, <Number Y>]**
 When the new point moves, A moves with it and the coordinates of the new point are (X, Y) and usually X and Y depends on the coordinates of A.

At the **input** area at the bottom of the screen, type

P = DynamicCoordinates[
 A,
 If[Distance[A, C'] < 0.2, x(C'), x(A)],
 If[Distance[A, C'] < 0.2, y(C'), y(A)]
]

Annotations: A box labeled "P depends on A" points to A. A box labeled "x-coordinate of P" points to x(A). A box labeled "y-coordinate of P" points to y(A).

Step 4

To create a point P that act as a phantom of A and snap to **points B' and C'**, we replace the x(A) and y(A) in the original definition of P by

If[Distance[A, B'] < 0.2, x(B'), x(A)] and If[Distance[A, B'] < 0.2, y(B'), y(A)] respectively.

Right click on P and edit its definition as

DynamicCoordinates[
 A,
 If[Distance[A, B'] < 0.2, x(B'), x(A)],
 If[Distance[A, C'] < 0.2, x(C'), x(A)],
 If[Distance[A, B'] < 0.2, y(B'), y(A)],
 If[Distance[A, C'] < 0.2, y(C'), y(A)]
]

Annotations: A box labeled "If[Distance[A, B'] < 0.2, y(B'), y(A)]" points to the second y-condition. A box labeled "If[Distance[A, B'] < 0.2, x(B'), x(A)]" points to the first x-condition. A box labeled "If[Distance[A, C'] < 0.2, y(C'), y(A)]" points to the second y-condition. The original x(A) and y(A) terms in the original definition are crossed out with diagonal lines.

** In short, type

P = DynamicCoordinates[A,
 If[Distance[A, C'] < 0.2, x(C'), If[Distance[A, B'] < 0.2, x(B'), x(A)]],
 If[Distance[A, C'] < 0.2, y(C'), If[Distance[A, B'] < 0.2, y(B'), y(A)]]
]

Step 5

Create a point Q that act as a phantom of C and snap to points B'.

At the **input** area, type

Q = DynamicCoordinates[C, If[Distance[C, B'] < 0.2, x(B'), x(C)], If[Distance[C, B'] < 0.2, y(B'), y(C)]]

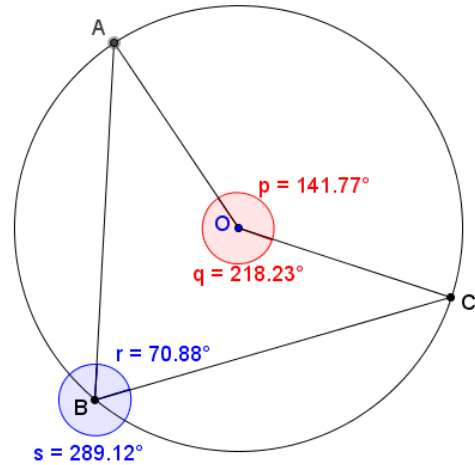
Step 6

Hide points A, A', B', C and C'.
 Rename P as A and Q as C.
 Change the color of A, B, and C to black.

Step 7

Refer to the figure, draw the line segments and create $\angle AOC$, $\angle ABC$ and their reflex angles.

Rename the angles as p, q, r and s as in the figure.
 Set the colour of the angles at centre as red and the angles at circumference as blue.



Step 8

We want to show the pair p and r if $r < s$, otherwise show the pair q and s.

Right click on r, select object properties and choose the “Advanced” panel.
 In the field “Condition to Show Object”, type “ $r < s$ ”, do the same for the angle p

Right click on s, select object properties and choose the “Advanced” panel.
 In the field “Condition to Show Object”, type “ $s < r$ ”, do the same for the angle q

Step 9

Insert text \boxed{ABC} to show the sizes of $\angle ABC$ and $\angle AOC$.

The size of $\angle ABC$ is r if $r < s$, otherwise it is s. This can be written as $\text{if}[r < s, r, s]$.

The size of $\angle AOC$ is the corresponding “partner” of r and s. If $r < s$, it is p, otherwise it is q, i.e. $\text{if}[r < s, p, q]$.

Step 10

Insert text \boxed{ABC} to show the ratio between $\angle ABC$ and $\angle AOC$. To create a fraction, we use the LaTeX command $\frac{\text{numerator}}{\text{denominator}}$

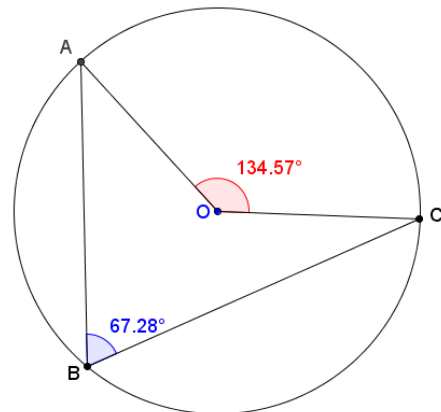
$$\frac{\angle AOC}{\angle ABC} = \frac{\text{if}[r < s, p, q]}{\text{if}[r < s, r, s]} = \frac{\text{if}[r < s, p, q]}{\text{if}[r < s, r, s]}$$

Step 11

To change the colour of the numerator and denominator, we enclose the numerator by $\text{red}\{ \}$ and the denominator by $\text{blue}\{ \}$.

$$\frac{\text{red}\{\text{if}[r < s, p, q]\}}{\text{blue}\{\text{if}[r < s, r, s]\}}$$

$$\begin{aligned} \text{Angle at centre} &= 134.57^\circ & \frac{\angle AOC}{\angle ABC} &= \frac{134.57^\circ}{67.28^\circ} = 2 \\ \text{Angle at circumference} &= 67.28^\circ \end{aligned}$$



~ End of Task A ~

Task A-1: Angle at Centre and Angle NOT at Circumference

Step 1

Repeat Step 1 of Task A.

Step 2

Create a free point D on the plane. Then, create a line passing through the centre O and D. Mark one of the points of intersection of the line and the circle as E.

Hide the points D, E and the line.

Step 3

Create a point B with the dynamic coordinates depending on point D, while snapping to point E. **(Exercise)**

Step 4

Follow the rest of steps in Task A to complete the dynamic worksheet to show one constraint of the theorem by the counter-examples.

~ End of Task A-1 ~

Task A-2: Angle at Centre and Angle at Circumference of an ELLIPSE

Step 1

Create an ellipse. Label the mid-point of the foci as O.

Repeat all the other steps in Task A.

~ End of Task A-2 ~

Task A-3: Angle at Centre and Angle at “Circumference” of a SQUARE

Step 1

Create a square by using the “Regular Polygon” tool. Label the centre of the square as O.

Step 2

Create Sq as a list of item holding the four segments of the square using the bracket “{ }”. Define points A, B, C as “point[Sq]”.

Repeat all the other steps in Task A.

~ End of Task A-3 ~

Think about it:

Student QQ claims that if $\beta = 2\alpha$, D must be the centre of the circle. Do you agree? Explain your answer.

